

MUSIC 115A
Written Test 1 (50pts)

Name _____
Instructor: Jaeryoung Lee

1. Without looking at the keyboard, fill in the letter names of the white keys in the blanks. (10pts)
_____ is between each 2 black-key group.



_____ is to the right of each 2 black-key group.

_____ is to the right of each 3 black-key group.

_____ is to the left of each 3 black-key group.

_____ is between the bottom two black keys in each 3 black-key group.

2. Write the letter names of the notes in each measure. (10pts)




3. Write counts (1 2 3 4) in each measure. (4pts)




4. Write counts (1 2 3) in each measure. (4pts)



5. Write the NUMBER of beats each rest of note receives in common time. (12pts)



6. Write the alphabet name of each note. (10pts)



1 2 3 4 5 6 7 8 9 10