



1. Arrange these dynamic signs in order softest to loudest. The first one is given. (7 pts)

ff mf mp ppp pp p fff f


ppp _____

2. Identify the following as a slur or a tie (4 pts)










3. Write the letter names of 2 notes **AND** the interval in each measure. Ex. C-D, 2nd (36 pts)



4. Write each chord on **both** treble and bass clef. (3 pts)

I in C major

V7 in C major

IV in C major

