

1. Without looking at the keyboard, fill in the letter names of the white keys in the blanks. (10pts)
_____ is between each 2 black-key group.



_____ is to the right of each 2 black-key group.

_____ is to the right of each 3 black-key group.

_____ is to the left of each 3 black-key group.

_____ is between the bottom two black keys in each 3 black-key group.

2. Write the letter names of the notes in each measure. (10pts)



3. Write counts in each measure. Ex. 1 2 3 4. (4pts)




4. Write counts in each measure. Ex. 1 2 3. (4pts)



5. Write the number of beats each rest or note receives in common time. (12pts)



6. Write the alphabet name of each note. (10pts)



1 2 3 4 5 6 7 8 9 10