

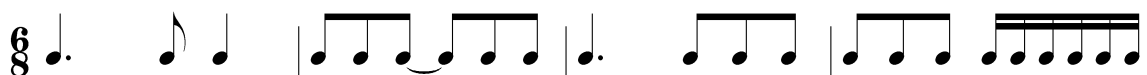
Music 150A

Quiz 2: Rhythm I & II (40 PTS)

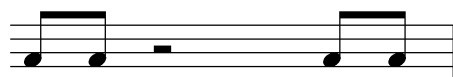
Instructor: Jaeryoung Lee

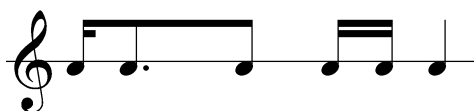
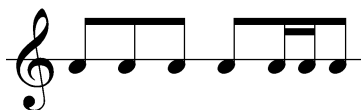
Name _____

1. Write counts in each measure. (20 pts)



2. Determine the time signature and write counts for each measure. (20 pts)





PLEASE STAPLE THESE TWO PAGES BEFORE YOU TURN IN.