



MUSIC 215A
Written Test 1 (50 pts)

Name _____
Instructor: Jaeryoung Lee


1. Write G HARMONIC MINOR DESCENDING scale, G to G, in the bass clef. Use accidentals, not key signatures, if needed. (8 pts)



2. The tonic note in D major is _____
 3. The dominant note in G minor is _____
 4. The subdominant note in Db major is _____
 5. The dominant note in A minor is _____
 6. The mediant note in G minor is _____
 7. The leading tone in Gb major is _____
8. Write the order of sharps in both treble and bass clef. (2 pts)



9. Write the order of flats in both treble and bass clef. (2 pts)



10. Write each chord on **both** treble and bass clef. Use accidentals, not key signatures, if needed. (10 pts)

IV in D major IV in G major i in D minor V7 in D minor V7 in C major

}	